

हमारा विश्वास... हर एक विद्यार्थी है खास

**JEE  
MAIN  
Sept.  
2020**

**QUESTION PAPER WITH SOLUTION**

**PHYSICS \_ 6 Sep. \_ SHIFT - 2**



**MOTION™**

H.O. : 394, Rajeev Gandhi Nagar, Kota  
www.motion.ac.in | ✉: info@motion.ac.in

हमारा विश्वास... हर एक विद्यार्थी है खास

**Q.1** For a plane electromagnetic wave, the magnetic field at a point  $x$  and time  $t$  is

$$\vec{B}(x, t) = [1.2 \times 10^{-7} \sin(0.5 \times 10^3 x + 1.5 \times 10^{11} t) \hat{k}] \text{ T}$$

The instantaneous electric field  $\vec{E}$  corresponding to  $\vec{B}$  is :  
(speed of light  $c = 3 \times 10^8 \text{ ms}^{-1}$ )

(1)  $\vec{E}(x, t) = [36 \sin(1 \times 10^3 x + 1.5 \times 10^{11} t) \hat{i}] \frac{\text{V}}{\text{m}}$

(2)  $\vec{E}(x, t) = [36 \sin(0.5 \times 10^3 x + 1.5 \times 10^{11} t) \hat{k}] \frac{\text{V}}{\text{m}}$

(3)  $\vec{E}(x, t) = [36 \sin(1 \times 10^3 x + 0.5 \times 10^{11} t) \hat{j}] \frac{\text{V}}{\text{m}}$

(4)  $\vec{E}(x, t) = [-36 \sin(0.5 \times 10^3 x + 1.5 \times 10^{11} t) \hat{j}] \frac{\text{V}}{\text{m}}$

**Sol. 4**

$$|\vec{E}| = |\vec{B}| c$$

$$\Rightarrow 1.2 \times 10^{-7} \times \sin(0.5 \times 10^3 x + 1.5 \times 10^{11} t) \times 3 \times 10^8$$

$$\Rightarrow 36 \sin(0.5 \times 10^3 x + 1.5 \times 10^{11} t)$$

$\lambda \rightarrow$  Not change  $\rightarrow$  Answer 1, 3 incorrect

$\vec{E}$  and  $\vec{B} \rightarrow$  not same direction  $\rightarrow$  2nd incorrect

**Q.2** Particle A of mass  $m_1$  moving with velocity  $(\sqrt{3}\hat{i} + \hat{j}) \text{ ms}^{-1}$  collides with another particle B of mass  $m_2$  which is at rest initially. Let  $\vec{V}_1$  and  $\vec{V}_2$  be the velocities of particles A and B after collision

respectively. If  $m_1 = 2m_2$  and after collision  $\vec{V}_1 = (\hat{i} + \sqrt{3}\hat{j}) \text{ ms}^{-1}$ , the angle between  $\vec{V}_1$  and  $\vec{V}_2$  is :

(1)  $105^\circ$

(2)  $15^\circ$

(3)  $-45^\circ$

(4)  $60^\circ$

**Sol. 1**

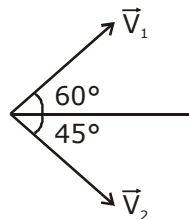
From momentum conservation

$$(2m)(\sqrt{3}\hat{i} + \hat{j}) + 0 = 2m(\hat{i} + \sqrt{3}\hat{j}) + m\vec{V}_2$$

$$\vec{V}_2 = (2(\sqrt{3} - 1))(\hat{i} - \hat{j})$$

$$\text{and } \vec{V}_1 = \hat{i} + \sqrt{3}\hat{j}$$

so angle b/w  $\vec{V}_1$  and  $\vec{V}_2$  is  $105^\circ$ .



**CRASH COURSE**  
FOR JEE ADVANCED 2020

FREE Online Lectures Available on YouTube

Go Premium at ₹ 1100

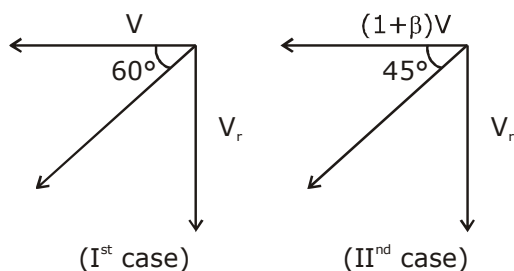
◆ Doubt Support ◆ Advanced Level Test Access  
◆ Live Test Paper Discussion ◆ Final Revision Exercises

Start Date: **07 Sept. 2020**

**Q.3** When a car is at rest, its driver sees rain drops falling on it vertically. When driving the car with speed  $v$ , he sees that rain drops are coming at an angle  $60^\circ$  from the horizontal. On further increasing the speed of the car to  $(1 + \beta)v$ , this angle changes to  $45^\circ$ . The value of  $\beta$  is close to:  
 (1) 0.50                      (2) 0.73                      (3) 0.37                      (4) 0.41

**Sol. 2**

$$\vec{V}_{rm} = \vec{V}_r - \vec{V}_m$$



$$\tan 60 = \frac{V_r}{v} \quad \dots(1)$$

$$\tan 45 = \frac{V_r}{(1 + \beta)v} \quad \dots(2)$$

from (1)/(2)

$$\frac{\sqrt{3}}{1} = \frac{1 / 4}{1 / (1 + \beta)v}$$

$$\sqrt{3} = 1 + \beta \Rightarrow \beta = 0.732$$

**Q.4** A charged particle going around in a circle can be considered to be a current loop. A particle of mass  $m$  carrying charge  $q$  is moving in a plane with speed  $v$  under the influence of magnetic field  $\vec{B}$ . The magnetic moment of this moving particle:

- (1)  $\frac{mv^2\vec{B}}{2B^2}$                       (2)  $-\frac{mv^2\vec{B}}{2\pi B^2}$                       (3)  $-\frac{mv^2\vec{B}}{2B^2}$                       (4)  $-\frac{mv^2\vec{B}}{B^2}$

**Sol. 3**

Magnetic dipole moment

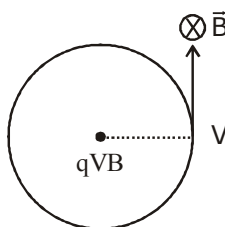
$$M = iA$$

$$\therefore i = qF, \quad A = \pi R^2$$

$$F = \frac{qB}{2\pi m}, \quad R = \frac{mv}{qB}$$

$$M = q \left( \frac{qB}{2\pi m} \right) \times \pi \left( \frac{m^2 v^2}{q^2 B^2} \right)$$

$$M = \frac{MV^2}{2B}$$



**CRASH COURSE**  
**FOR JEE ADVANCED 2020**

FREE Online Lectures Available on **YouTube**

Go Premium at ₹ 1100

- ◆ Doubt Support ◆ Advanced Level Test Access
- ◆ Live Test Paper Discussion ◆ Final Revision Exercises

Start Date: **07 Sept. 2020**

हमारा विश्वास... हर एक विद्यार्थी है खास

dir<sup>n</sup> of  $\vec{M}$  and  $\vec{B}$  is opposite.

$$\vec{M} = \frac{MV^2}{2B} \cdot (-\hat{B})$$

$$\rightarrow \frac{-MV^2}{2B^2} \vec{B}$$

**Q.5** A double convex lens has power P and same radii of curvature R of both the surfaces. The radius of curvature of a surface of a plano-convex lens made of the same material with power 1.5 P is:

(1)  $\frac{R}{3}$

(2)  $\frac{3R}{2}$

(3)  $\frac{R}{2}$

(4) 2R

**Sol. 1**

$$P = \left( \frac{\mu_l}{\mu_s} - 1 \right) \left( \frac{2}{R} \right) \quad \dots(1)$$

$$\frac{3}{2}P = \left( \frac{\mu_l}{\mu_s} - 1 \right) \left( \frac{1}{R_1} \right) \quad \dots(2)$$

from (1)/(2)

$$\frac{P}{\frac{3}{2}P} = \frac{2/R}{1/R_1}$$

$$R_1 = R/3$$

**Q.6** A circuit to verify Ohm's law uses ammeter and voltmeter in series or parallel connected correctly to the resistor. In the circuit:

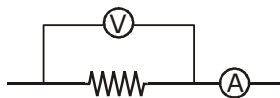
(1) Ammeter is always connected in series and voltmeter in parallel

(2) Both, ammeter and voltmeter must be connected in series

(3) Both ammeter and voltmeter must be connected in parallel

(4) ammeter is always used in parallel and voltmeter is series

**Sol. 1**



By theory

**Q.7** A square loop of side 2a and carrying current I is kept in xz plane with its centre at origin. A long wire carrying the same current I is placed parallel to z-axis and passing through point (0, b, 0), (b >> a). The magnitude of torque on the loop about z-axis will be:

(1)  $\frac{2\mu_0 I^2 a^2}{\pi b}$

(2)  $\frac{2\mu_0 I^2 a^2 b}{\pi(a^2 + b^2)}$

(3)  $\frac{\mu_0 I^2 a^2}{2\pi b}$

(4)  $\frac{\mu_0 I^2 a^2 b}{2\pi(a^2 + b^2)}$

**CRASH COURSE**  
FOR JEE ADVANCED 2020

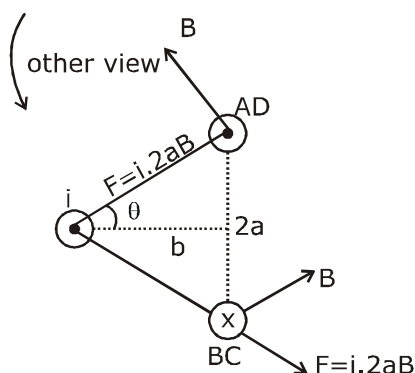
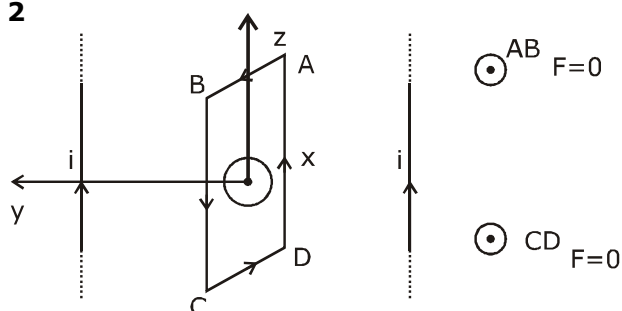
FREE Online Lectures Available on YouTube

Go Premium at ₹ 1100

◆ Doubt Support ◆ Advanced Level Test Access  
◆ Live Test Paper Discussion ◆ Final Revision Exercises

Start Date: **07 Sept. 2020**

Sol. 2



$$B = \frac{\mu_0 i}{2\pi\sqrt{a^2 + b^2}}$$

$$\therefore \text{torque} = F \cos \theta \cdot 2a$$

$$= \frac{i \cdot 2a \cdot \mu_0 i}{2\pi\sqrt{a^2 + b^2}} \cdot \frac{b}{\sqrt{a^2 + b^2}}$$

$$= \frac{2\mu_0 I^2 a^2 b}{\pi(a^2 + b^2)}$$

Q.8 In a dilute gas at pressure P and temperature T, the mean time between successive collisions of a molecule varies with T as:

- (1)  $\sqrt{T}$                       (2)  $\frac{1}{T}$                       (3) T                      (4)  $\frac{1}{\sqrt{T}}$

Sol. 4

$$T_{\text{mean}} \propto \frac{1}{\sqrt{T}}$$

$$\therefore \text{time} = \frac{V}{4\pi\sqrt{2}} r^2 V N$$

$$V = \sqrt{\frac{2RT}{\pi M}}$$

**CRASH COURSE**  
FOR JEE ADVANCED 2020

FREE Online Lectures Available on YouTube

Go Premium at ₹ 1100

- ◆ Doubt Support
- ◆ Advanced Level Test Access
- ◆ Live Test Paper Discussion
- ◆ Final Revision Exercises

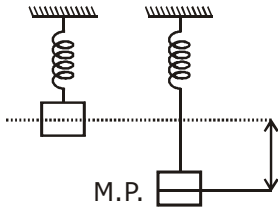
Start Date: **07 Sept. 2020**

हमारा विश्वास... हर एक विद्यार्थी है खास

- Q.9** When a particle of mass  $m$  is attached to a vertical spring of spring constant  $k$  and released, its motion is described by  $y(t) = y_0 \sin^2 \omega t$ , where 'y' is measured from the lower end of unstretched spring. Then  $\omega$  is:

(1)  $\sqrt{\frac{g}{y_0}}$       (2)  $\frac{1}{2} \sqrt{\frac{g}{y_0}}$       (3)  $\sqrt{\frac{2g}{y_0}}$       (4)  $\sqrt{\frac{g}{2y_0}}$

**9. 4**



$$y(t) = \frac{y_0}{2} (1 - \cos(2\omega t))$$

From comparing standard equation of SHM Amplitude  $A = \frac{y_0}{2}$

At equilibrium situation  $\frac{mg}{k} = \frac{y_0}{2}$

$$\frac{2g}{y_0} = \frac{k}{m}$$

$$2\omega = \sqrt{\frac{k}{m}}$$

$$\omega = \frac{1}{2} \sqrt{\frac{k}{m}}$$

$$\omega = \frac{1}{2} \sqrt{\frac{2g}{y_0}}$$

$$\omega = \frac{1}{\sqrt{2}} \sqrt{\frac{g}{y_0}}$$

- Q.10** The linear mass density of a thin rod AB of length  $L$  varies from A to B as  $\lambda(x) = \lambda_0 \left(1 + \frac{x}{L}\right)$ , where  $x$  is the distance from A. If  $M$  is the mass of the rod then its moment of inertia about an axis passing through A and perpendicular to the rod is:

(1)  $\frac{2}{5} ML^2$       (2)  $\frac{5}{12} ML^2$       (3)  $\frac{7}{18} ML^2$       (4)  $\frac{3}{7} ML^2$

**CRASH COURSE**  
FOR JEE ADVANCED 2020

FREE Online Lectures Available on YouTube

Go Premium at ₹ 1100

◆ Doubt Support ◆ Advanced Level Test Access  
◆ Live Test Paper Discussion ◆ Final Revision Exercises

Start Date: **07 Sept. 2020**

**Sol. 3**

$$dm = \lambda_0 \left(1 + \frac{x}{L}\right) dx$$

$$\int_0^M dm = \int_0^L \lambda_0 \left(1 + \frac{x}{L}\right) dx$$

$$M = \frac{3\lambda_0 L}{2} \quad \dots(1)$$

$$dI = dm x^2$$

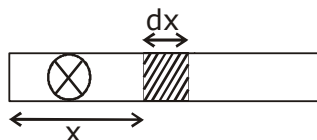
$$\int dI = \int dm x^2$$

$$I = \int_0^L \lambda_0 \left(1 + \frac{x}{L}\right) dx x^2$$

$$I = \frac{7\lambda_0 L^3}{12}$$

$$\text{from (1) } \lambda_0 = \frac{2M}{3L}$$

$$I = \frac{7ML^2}{18}$$



**Q.11** A fluid is flowing through a horizontal pipe of varying cross-section, with speed  $v \text{ ms}^{-1}$  at a point where the pressure is  $P$  pascal. At another point where pressure is  $\frac{P}{2}$  Pascal its speed is  $V \text{ ms}^{-1}$ . If the density of the fluid is  $\rho \text{ kg m}^{-3}$  and the flow is streamline, then  $V$  is equal to:

- (1)  $\sqrt{\frac{P}{2\rho} + v^2}$       (2)  $\sqrt{\frac{P}{\rho} + v^2}$       (3)  $\sqrt{\frac{2P}{\rho} + v^2}$       (4)  $\sqrt{\frac{P}{\rho} + v}$

**Sol. 2**

From Bernoulli's eq<sup>n</sup>.

$$P + \frac{1}{2}\rho v^2 = \frac{P}{2} + \frac{1}{2}\rho V_1^2$$

$$V_1 = \sqrt{\frac{P}{\rho} + v^2}$$

**Q.12** Three rods of identical cross-section and lengths are made of three different materials of thermal conductivity  $K_1, K_2$  and  $K_3$ , respectively. They are joined together at their ends to make a long rod (see figure). One end of the long rod is maintained at  $100^\circ\text{C}$  and the other at  $0^\circ\text{C}$  (see figure). If the joints of the rod are at  $70^\circ\text{C}$  and  $20^\circ\text{C}$  in steady state and there is no loss of energy from the surface of the rod, the correct relationship between  $K_1, K_2$  and  $K_3$  is:

**CRASH COURSE**  
FOR JEE ADVANCED 2020

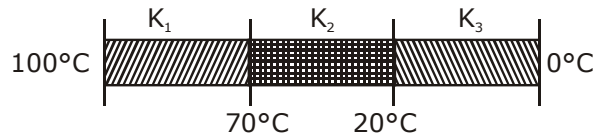
FREE Online Lectures Available on YouTube

Go Premium at ₹ 1100

- ◆ Doubt Support ◆ Advanced Level Test Access
- ◆ Live Test Paper Discussion ◆ Final Revision Exercises

Start Date: **07 Sept. 2020**

हमारा विश्वास... हर एक विद्यार्थी है खास



- (1)  $K_1 : K_2 = 5 : 2,$   
 $K_1 : K_3 = 3 : 5$       (2)  $K_1 < K_2 < K_3$       (3)  $K_1 : K_3 = 2 : 3,$   
 $K_2 : K_3 = 2 : 5$       (4)  $K_1 > K_2 > K_3$

**Sol. 3**

Heat current same

$$\frac{K_1(100 - 70)}{R_1} = \frac{K_2(70 - 20)}{R_2} = \frac{K_3(20 - 0)}{R_3}$$

$\therefore l_1 A = \text{same}$

$$30k_1 = 50k_2 = 20k_3$$

$$\frac{K_1}{k_2} = \frac{5}{3}, \frac{K_2}{k_3} = \frac{2}{5}$$

$$\frac{K_1}{K_3} = \frac{2}{3}$$

**Q.13** Assuming the nitrogen molecule is moving with r.m.s. velocity at 400 K, the de-Broglie wavelength of nitrogen molecule is close to : (Given : nitrogen molecule weight :  $4.64 \times 10^{-26}$  kg, Boltzman constant:  $1.38 \times 10^{-23}$  J/K, Planck constant :  $6.63 \times 10^{-34}$  J.s)

- (1)  $0.44 \text{ \AA}$       (2)  $0.34 \text{ \AA}$       (3)  $0.20 \text{ \AA}$       (4)  $0.24 \text{ \AA}$

**Sol. 4**

$$\lambda = \frac{h}{mv_{\text{r.m.s.}}}$$

$$\therefore v = \sqrt{\frac{3kT}{M}}$$

$$\lambda = \frac{h}{\sqrt{3mkT}}$$

$$\lambda = \frac{6.6 \times 10^{-34}}{\sqrt{3 \times 4.6 \times 10^{-26} \times 1.38 \times 10^{-23} \times 400}}$$

$$\lambda = 2.4 \times 10^{-11} \text{ m}$$

$$\Rightarrow 0.24 \text{ \AA}$$

**Q.14** Consider the force F on a charge 'q' due to a uniformly charged spherical shell of radius R carrying charge Q distributed uniformly over it. Which one of the following statements is true for F, if 'q' is placed at distance r from the centre of the shell?

(1)  $\frac{1}{4\pi \epsilon_0} \frac{qQ}{R^2} > F > 0$  for  $r < R$

(2)  $F = \frac{1}{4\pi \epsilon_0} \frac{qQ}{r^2}$  for  $r > R$

(3)  $F = \frac{1}{4\pi \epsilon_0} \frac{qQ}{r^2}$  for all r

(4)  $F = \frac{1}{4\pi \epsilon_0} \frac{qQ}{R^2}$  for  $r < R$

**CRASH COURSE**  
**FOR JEE ADVANCED 2020**

FREE Online Lectures Available on **YouTube**

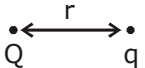
Go Premium at ₹ 1100

- ◆ Doubt Support ◆ Advanced Level Test Access
- ◆ Live Test Paper Discussion ◆ Final Revision Exercises

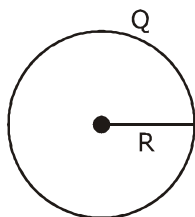
Start Date: **07 Sept. 2020**



**Sol. 2**  
 For  $r < R$   
 $E = 0$   
 For  $r > R$



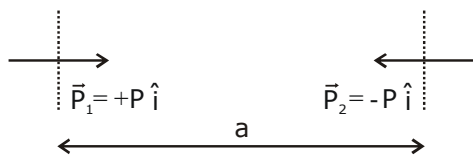
$F = \frac{kQq}{r^2}$



**Q.15** Two identical electric point dipoles have dipole moments  $\vec{p}_1 = p\hat{i}$  and  $\vec{p}_2 = -p\hat{i}$  and are held on the x-axis at distance 'a' from each other. When released, they move along the x-axis with the direction of their dipole moments remaining unchanged. If the mass of each dipole is 'm', their speed when they are infinitely far apart is:

- (1)  $\frac{p}{a} \sqrt{\frac{3}{2\pi\epsilon_0 ma}}$       (2)  $\frac{p}{a} \sqrt{\frac{1}{\pi\epsilon_0 ma}}$       (3)  $\frac{p}{a} \sqrt{\frac{1}{2\pi\epsilon_0 ma}}$       (4)  $\frac{p}{a} \sqrt{\frac{2}{\pi\epsilon_0 ma}}$

**Sol. 3**



interaction energy of dipole is

$$= P \frac{dv}{dr} \Rightarrow P \frac{d\left(\frac{Kp}{r^2}\right)}{dr} \Rightarrow \frac{-2kP}{r^3}$$

Now from E.C.

$$\frac{2kP}{r^3} = \frac{1}{2}mv^2 + \frac{1}{2}mv^2$$

$$V = \sqrt{\frac{2kp^2}{mr^3}}$$

$$\therefore r = a$$

$$V = \frac{P}{a} \sqrt{\frac{1}{2\pi\epsilon_0 ma}}$$

**Q.16** Two planets have masses M and 16 M and their radii are a and 2a, respectively. The separation between the centres of the planets is 10a. A body of mass m is fired from the surface of the larger planet towards the smaller planet along the line joining their centres. For the body to be able to reach at the surface of smaller planet, the minimum firing speed needed is:

- (1)  $2\sqrt{\frac{GM}{a}}$       (2)  $\sqrt{\frac{GM^2}{ma}}$       (3)  $\frac{3}{2}\sqrt{\frac{5GM}{a}}$       (4)  $4\sqrt{\frac{GM}{a}}$

**CRASH COURSE**  
**FOR JEE ADVANCED 2020**

FREE Online Lectures Available on **YouTube**

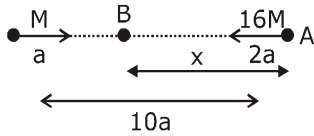
Go Premium at ₹ 1100

- ◆ Doubt Support
- ◆ Advanced Level Test Access
- ◆ Live Test Paper Discussion
- ◆ Final Revision Exercises

Start Date: **07 Sept. 2020**

हमारा विश्वास... हर एक विद्यार्थी है खास

**Sol. 3**



A → Where  $f_{\text{net}} = 0$

$$\frac{G(16M)(M)}{x^2} = \frac{G(M)(M)}{(10-x)^2}$$

$$x = 8a$$

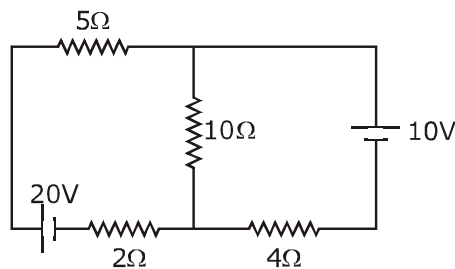
So if particle reaches A it will automatically reaches to smaller planet.

Now E - C b/w B and A.

$$\frac{1}{2}Mv^2 - \frac{G(16M)(M)}{2a} - \frac{GMM}{8a} = \frac{-G(16M)(M)}{8a} - \frac{G(M)(M)}{2a}$$

$$v = \frac{3}{2} \sqrt{\frac{5GM}{a}}$$

**Q.17** In the figure shown, the current in the 10 V battery is close to:



- (1) 0.21 A from positive to negative terminal
- (2) 0.36 A from negative to positive terminal
- (3) 0.42 A from positive to negative terminal
- (4) 0.71 A from positive to negative terminal

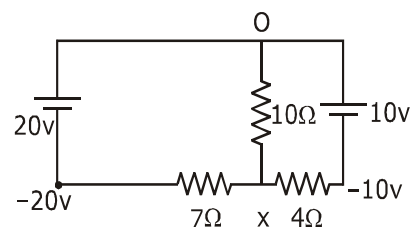
**Sol. 1**

$$\frac{x+20}{7} + \frac{x+10}{4} + \frac{x}{10} = 0$$

$$x = \frac{-1500}{138} = -10.87$$

current through 10 v .

$$i = \frac{10.87 - 10}{4} \Rightarrow 0.21 \text{Amp.}$$



**CRASH COURSE**  
FOR JEE ADVANCED 2020

FREE Online Lectures Available on YouTube

Go Premium at ₹ 1100

- ◆ Doubt Support ◆ Advanced Level Test Access
- ◆ Live Test Paper Discussion ◆ Final Revision Exercises

Start Date: **07 Sept. 2020**

**Q.18** A student measuring the diameter of a pencil of circular cross-section with the help of a vernier scale records the following four readings 5.50 mm, 5.55 mm, 5.45 mm, 5.65 mm. The average of these four readings is 5.5375 mm and the standard deviation of the data is 0.07395 mm. The average diameter of the pencil should therefore be recorded as:

- (1)  $(5.54 \pm 0.07)$  mm
- (2)  $(5.5375 \pm 0.0740)$  mm
- (3)  $(5.5375 \pm 0.0739)$  mm
- (4)  $(5.538 \pm 0.074)$  mm

**Sol. 1**

Significant rule says that reading should has same significant figure as that of reading given.  
 $5.5375 \rightarrow$  rounded to  $\rightarrow 5.54$

**Q.19** Given the masses of various atomic particles  $m_p = 1.0072$  u,  $m_n = 1.0087$  u,  $m_e = 0.000548$  u,  $m_{\bar{\nu}} = 0$ ,  $m_d = 2.0141$  u, where p  $\equiv$  proton, n  $\equiv$  neutron, e  $\equiv$  electron,  $\bar{\nu} \equiv$  antineutrino and d  $\equiv$  deuteron. Which of the following process is allowed by momentum and energy conservation?

- (1)  $n + n \rightarrow$  deuterium atom (electron bound to the nucleus)
- (2)  $e^+ + e^- \rightarrow \gamma$
- (3)  $p \rightarrow n + e^+ + \bar{\nu}$
- (4)  $n + p \rightarrow d + \gamma$

**Sol. 4**

Answer - 1  $\rightarrow$  incorrect  
 (because  $n + p \rightarrow d$ )  
 Answer - 2  $\rightarrow$  incorrect  
 (because  $e^- + e^- \rightarrow 2\gamma$ )  
 Answer - 3  $\rightarrow$  incorrect  
 (because mass  $\uparrow$ )

**Q.20** A particle moving in the xy plane experiences a velocity dependent force  $\vec{F} = k(v_y \hat{i} + v_x \hat{j})$ , where  $v_x$  and  $v_y$  are the x and y components of its velocity  $\vec{v}$ . If  $\vec{a}$  is the acceleration of the particle, then which of the following statements is true for the particle?

- (1) kinetic energy of particle is constant in time
- (2) quantity  $\vec{v} \times \vec{a}$  is constant in time
- (3) quantity  $\vec{v} \cdot \vec{a}$  is constant in time
- (4)  $\vec{F}$  arises due to a magnetic field

**Sol. 2**

$$\text{given } \vec{F} = k(v_y \hat{i} + v_x \hat{j})$$

$$m\vec{a} = k(v_y \hat{i} + v_x \hat{j})$$

**CRASH COURSE**  
**FOR JEE ADVANCED 2020**

FREE Online Lectures Available on YouTube

Go Premium at ₹ 1100

- ◆ Doubt Support ◆ Advanced Level Test Access
- ◆ Live Test Paper Discussion ◆ Final Revision Exercises

Start Date: **07 Sept. 2020**

हमारा विश्वास... हर एक विद्यार्थी है खास

$$a_x = \frac{kv_y}{m}, a_y = \frac{kv_x}{m}$$

option -1 is incorrect. (K.E.  $\neq$  const.)

option -2 is correct.

$$\vec{V} \times \vec{a} = 0 \quad \vec{a} = \frac{k\vec{v}}{m}$$

because  $\vec{v}$  and  $\vec{a}$  in same direction.

$$\text{option - 3} \rightarrow \vec{v} \cdot \vec{a} = \frac{k}{m} [v_x^2 + v_y^2] \text{ (in correct)}$$

option - 4  $\rightarrow$  incorrect.

**Q.21** A Young's double-slit experiment is performed using monochromatic light of wavelength  $\lambda$ . The intensity of light at a point on the screen, where the path difference is  $\lambda$ , is K units. The intensity

of light at a point where the path difference is  $\frac{\lambda}{6}$  is given by  $\frac{nK}{12}$ , where n is an integer. The value

of n is \_\_\_\_\_.

**Sol. 9**

From Ist case

$$I_{\text{net}} = 4I \cos^2 \frac{\Delta\phi}{2}$$

$$\therefore \Delta\phi = \frac{2\pi}{\lambda} \times \lambda \Rightarrow 2\pi$$

$$I_{\text{net}} = 4I = k \text{ (given)}$$

from IInd case

$$I_{\text{net}} = 4I \cos^2 \frac{\Delta\phi}{2}$$

$$\therefore \Delta\phi = \frac{2\pi}{\lambda} \times \frac{\lambda}{6} \Rightarrow \frac{\pi}{3}$$

$$I_{\text{net}} = 4I \times \frac{3}{4} \Rightarrow \frac{3}{4}k = \frac{nk}{12}$$

$$n = 9$$

**CRASH COURSE**  
FOR JEE ADVANCED 2020

FREE Online Lectures Available on  YouTube

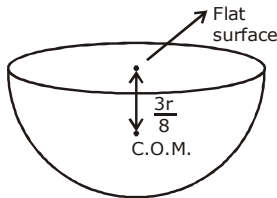
Go Premium at ₹ 1100

◆ Doubt Support ◆ Advanced Level Test Access  
◆ Live Test Paper Discussion ◆ Final Revision Exercises

Start Date: **07 Sept. 2020**

**Q.22** The centre of mass of solid hemisphere of radius 8 cm is x from the centre of the flat surface. Then value of x is \_\_\_\_\_.

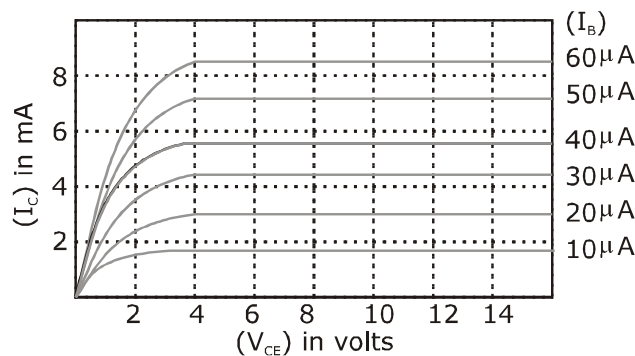
**Sol.** 3



As we know c.o.m. of hemisphere =  $\frac{3r}{8}$

$$r = 8\text{cm (given)} \Rightarrow \frac{3 \times 8}{8} \Rightarrow 3\text{cm}$$

**Q.23** The output characteristics of a transistor is shown in the figure. When  $V_{CE}$  is 10V and  $I_C = 4.0\text{ mA}$ , then value of  $\beta_{ac}$  is \_\_\_\_\_.



**Sol.** 150

$$\beta = \frac{\Delta I_C}{\Delta I_B}$$

$$\Delta I_B = 30 - 20 = 10\mu\text{A}$$

$$\Delta I_C = 4.5 - 3 = 1.5\text{mA}$$

$$\beta = \frac{1.5 \times 10^{-3}}{10 \times 10^{-6}} = 150$$

$$I_C = 4\text{mA (reference value given)}$$

**CRASH COURSE**  
FOR JEE ADVANCED 2020

FREE Online Lectures Available on **YouTube**

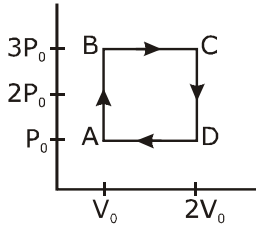
Go Premium at ₹ 1100

◆ Doubt Support ◆ Advanced Level Test Access  
◆ Live Test Paper Discussion ◆ Final Revision Exercises

Start Date: **07 Sept. 2020**

हमारा विश्वास... हर एक विद्यार्थी है खास

**Q.24** An engine operates by taking a monoatomic ideal gas through the cycle shown in the figure. The percentage efficiency of the engine is close to \_\_\_\_\_.



**Sol. 19%**

$$\% \text{ efficiency of carnot engine } \eta = \frac{W}{Q} \times 100$$

$$\text{work} = \text{Area of ABCD} = (2P_0)(V_0)$$

$$\text{Heat} = Q_{AB} + Q_{BC}$$

(input)

$$Q_{AB} = \text{isobaric process}$$

$$= nC_V \Delta T \quad \therefore PV = nRT$$

$$\Rightarrow nC_V (T_B - T_A) \quad T = \frac{PV}{nR}$$

$$Q_{AB} = 1 \times \frac{3}{2} k(3P_0V_0 - P_0V_0) \Rightarrow 3P_0V_0$$

$$Q_{BC} = \text{isobaric process}$$

$$= nC_p \Delta T$$

$$\Rightarrow 1 \times \frac{5}{2} K(6P_0V_0 - 3P_0V_0) \Rightarrow 7.5P_0V_0$$

$$\eta = \frac{2P_0V_0}{3P_0V_0 + 7.5P_0V_0} \times 100 \approx 19\%$$

**Q.25** In a series LR circuit, power of 400W is dissipated from a source of 250 V, 50 Hz. The power factor of the circuit is 0.8. In order to bring the power factor to unity, a capacitor of value C is added in

series to the L and R. Taking the value of C as  $\left(\frac{n}{3\pi}\right) \mu\text{F}$ , then value of n is \_\_\_\_\_.

**Sol. 400**

given

in Ist case

power factor of LR CKT

$$\cos \phi = 0.8 = \frac{R}{\sqrt{R^2 + X_L^2}}$$

**CRASH COURSE**  
FOR JEE ADVANCED 2020

FREE Online Lectures Available on [YouTube](#)

Go Premium at ₹ 1100

◆ Doubt Support ◆ Advanced Level Test Access  
◆ Live Test Paper Discussion ◆ Final Revision Exercises

Start Date: **07 Sept. 2020**

where  $\sqrt{R^2 + X_L^2} = z \quad \dots(1)$

$\therefore P = VI$

$\Rightarrow 400 = (250)^2 \times \frac{R}{Z^2}$

$400 = (250)^2 \times \frac{0.8}{z}$

$z = 125 \quad \dots(2)$

$R = \frac{(250)^2 \times 0.8 \times 0.8}{400} \Rightarrow 100\Omega \quad \dots(3)$

from (1), (2) and (3)

$(100)^2 + X_L^2 = (125)^2$

$X_L^2 = 15625 - 10000$

$X_L^2 = 5625$

$X_L = 75 \quad \dots(4)$

in IInd case given.

Power factor = 1

that means

$X_L = X_C$  (Resonance condition)

$X_L = \frac{1}{\omega_c} \Rightarrow 75 = \frac{1}{(2\pi F)C}$

$C = \frac{1}{2\pi \times F \times 75}$

$C = \frac{1}{2\pi \times 50 \times 75} F \quad \dots(5)$

$C = \frac{n}{3\pi} \mu F$  given  $\dots(6)$

From (5) & (6)

$\frac{1}{2\pi \times 50 \times 75} = \frac{n \times 10^{-6}}{3\pi}$

$n = \frac{10^6}{7500} \Rightarrow \frac{3 \times 10^4}{75} \Rightarrow \frac{30000}{75}$

$n = 400$

**CRASH COURSE**  
**FOR JEE ADVANCED 2020**

FREE Online Lectures Available on  YouTube

Go Premium at ₹ 1100

◆ Doubt Support ◆ Advanced Level Test Access  
◆ Live Test Paper Discussion ◆ Final Revision Exercises

Start Date: **07 Sept. 2020**

जब इन्होंने पूरा किया अपना सपना  
तो आप भी पा सकते है लक्ष्य अपना

Admission  
**OPEN**

## JEE MAIN RESULT 2019



**Nitin Gupta**

Marks  
**335**  
13th (2019)

Marks  
**149**  
12th (2018)



**Shiv Modi**

Marks  
**318**  
13th (2019)

Marks  
**153**  
12th (2018)



**Ritik Bansal**

Marks  
**308**  
13th (2019)

Marks  
**218**  
12th (2018)



**Shubham Kumar**

Marks  
**300**  
13th (2019)

Marks  
**153**  
12th (2018)

### KOTA'S PIONEER IN DIGITAL EDUCATION

**1,95,00,000+** viewers | **72,67,900+** viewing hours | **2,11,000+** Subscribers

SERVICES	SILVER	GOLD	PLATINUM
Classroom Lectures (VOD)			
Live interaction	NA		
Doubt Support	NA		
Academic & Technical Support	NA		
Complete access to all content	NA		
Classroom Study Material	NA		
Exercise Sheets	NA		
Recorded Video Solutions	NA		
Online Test Series	NA		
Revision Material	NA		
<b>Upgrade to Regular Classroom program</b>	<b>Chargeable</b>	<b>Chargeable</b>	<b>Free</b>
Physical Classroom	NA	NA	
Computer Based Test	NA	NA	
Student Performance Report	NA	NA	
Workshop & Camp	NA	NA	
Motion Solution Lab- Supervised learning and instant doubt clearance	NA	NA	
Personalised guidance and mentoring	NA	NA	

### FEE STRUCTURE

CLASS	SILVER	GOLD	PLATINUM
7th/8th	FREE	₹ 12,000	₹ 35,000
9th/10th	FREE	₹ 15,000	₹ 40,000
11th	FREE	₹ 29,999	₹ 49,999
12th	FREE	₹ 39,999	₹ 54,999
12th Pass	FREE	₹ 39,999	₹ 59,999

+ Student Kit will be provided at extra cost to Platinum Student.

- \* **SILVER (Trial)** Only valid 7 DAYS or First 10 Hour's Lectures.
- \*\* **GOLD (Online)** can be converted to regular classroom (Any MOTION Center) by paying difference amount after lockdown.
- \*\*\* **PLATINUM (Online + Regular)** can be converted to regular classroom (Any MOTION Center) without any cost after lockdown.

New Batch Starting from :  
**16 & 23 September 2020**

**Zero Cost EMI Available**

**MOTION™**

H.O. : 394, Rajeev Gandhi Nagar, Kota  
www.motion.ac.in | ✉ : info@motion.ac.in